



# **Music Theory Module 1**

## **Class Worksheets**

# Lesson 1

## Staffs and Clefs

### 1. What are these lines called?


Tick the correct box.

Staves

Gloves

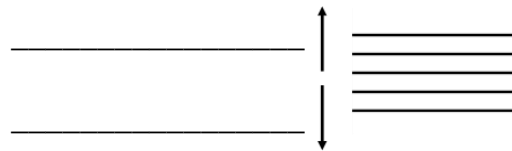
Stoves

Stews



### 2. In which direction do notes get higher, and in which direction do they get lower?

Fill in the blanks.



### 3. What is the name of this symbol?

Tick the correct box.

Trouble Clef

Triple Clef

Rebel Clef

Treble Clef



### 4. What is the name of this symbol?

Tick the correct box.

Race Clef

Bass Clef

Space Clef

Brace Clef






# Lesson 2



## Notes in the Treble Clef - F A C E

1. Write the following notes on the staff.



F            A            C            E

2. Name the following notes.






# Lesson 3



## Notes in the Treble Clef - E G B D F

1. Write the following notes on the staff.



E G B D F

2. Name the following notes.






# Lesson 4

## Notes in the Bass Clef - A C E G

1. Write the following notes on the staff.



A

C

E

G

2. Name the following notes.






# Lesson 5


## Notes on the Bass Clef - G B D F A

Write the following notes on the staff.



G            B            D            F            A

2. Name the following notes.






# Lesson 6

## Treble and Bass Clef Summary

1. Name the following notes.



2. Name the following notes.

